

**EMMANUEL MISSION SR SEC SCHOOL, BEAWAR**  
**ONLINE CLASSES**  
**WEEK – 23 (03.09.2020)**  
**CLASS – I**

\*\*\*\*\*

English: <https://youtu.be/PB52BRxdgU4>

Hindi: Kindly see below

Mathematics: Kindly see below

General Science: Kindly see below

Social Studies: Kindly see below

Computer Science: Kindly see below

General Knowledge: Kindly see below

Physical Education: <https://youtu.be/aTHB09KFRDY>

Music (Guitar): <https://youtu.be/9OphXCGrNyk>

Music (Keyboard): <https://youtu.be/z-9UKFPt5DE>

Health & Sanitation: <https://youtu.be/3uMnVQvt5uk>

Art Education: <https://youtu.be/hTIMl2T3IGc>

\*\*\*\*\*

# EMMANUEL MISSION SR SEC SCHOOL, BEAWAR

HINDI – I

CLASS – I

पाठ – 6 'ए' और 'ऐ' की मात्रा

(लिखित)

प्रश्न 1 चित्र देखकर सही शब्द पर सही ☒ का निशान लगाइए –



भैया

गैया ☒

खेवैया



शेर ☒

बाघ

गणेश



चमेली

सूरज

लालटेन ☒



थैला ☒

मैला

शैल

प्रश्न 2 चित्र देखकर शब्द सीढ़ी बनाइए



नेवला



लालटेन



नेत्र























नाव

**EMMANUEL MISSION SR SEC SCHOOL, BEAWAR**  
**MATHEMATICS**  
**CLASS – I**  
**Chapter -8 Numbers Up To 100**
















**8 NUMBERS UPTO 100**

Read and write numbers from 51 to 60.

	+		= Fifty one	<b>51</b>	Tens	Ones
					5	1
	+		= Fifty two	<b>52</b>	Tens	Ones
					5	2
	+		= Fifty three	<b>53</b>	Tens	Ones
					5	3
	+		= Fifty four	<b>54</b>	Tens	Ones
					5	4
	+		= Fifty five	<b>55</b>	Tens	Ones
					5	5
	+		= Fifty six	<b>56</b>	Tens	Ones
					5	6
	+		= Fifty seven	<b>57</b>	Tens	Ones
					5	7
	+		= Fifty eight	<b>58</b>	Tens	Ones
					5	8
	+		= Fifty nine	<b>59</b>	Tens	Ones
					5	9
	+		= Sixty	<b>60</b>	Tens	Ones
					6	0





















**Numbers from 61 to 70**

Read and write numbers from 61 to 70.

	+		= Sixty one	<b>61</b>	Tens	Ones
					6	1
	+		= Sixty two	<b>62</b>	Tens	Ones
					6	2
	+		= Sixty three	<b>63</b>	Tens	Ones
					6	3
	+		= Sixty four	<b>64</b>	Tens	Ones
					6	4
	+		= Sixty five	<b>65</b>	Tens	Ones
					6	5
	+		= Sixty six	<b>66</b>	Tens	Ones
					6	6
	+		= Sixty seven	<b>67</b>	Tens	Ones
					6	7
	+		= Sixty eight	<b>68</b>	Tens	Ones
					6	8
	+		= Sixty nine	<b>69</b>	Tens	Ones
					6	9
	+		= Seventy	<b>70</b>	Tens	Ones
					7	0





















**Numbers from 71 to 80**

Read and write numbers from 71 to 80.

	+		= Seventy one	<b>71</b>	Tens	Ones
					7	1
	+		= Seventy two	<b>72</b>	Tens	Ones
					7	2
	+		= Seventy three	<b>73</b>	Tens	Ones
					7	3
	+		= Seventy four	<b>74</b>	Tens	Ones
					7	4
	+		= Seventy five	<b>75</b>	Tens	Ones
					7	5
	+		= Seventy six	<b>76</b>	Tens	Ones
					7	6
	+		= Seventy seven	<b>77</b>	Tens	Ones
					7	7
	+		= Seventy eight	<b>78</b>	Tens	Ones
					7	8
	+		= Seventy nine	<b>79</b>	Tens	Ones
					7	9
	+		= Eighty	<b>80</b>	Tens	Ones
					8	0

**Numbers from 81 to 90**



















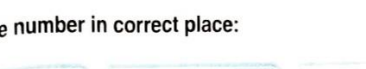

Read and write numbers from 81 to 90.

	+		= Eighty one	<b>81</b>	Tens	Ones
					8	1
	+		= Eighty two	<b>82</b>	Tens	Ones
					8	2
	+		= Eighty three	<b>83</b>	Tens	Ones
					8	3
	+		= Eighty four	<b>84</b>	Tens	Ones
					8	4
	+		= Eighty five	<b>85</b>	Tens	Ones
					8	5
	+		= Eighty six	<b>86</b>	Tens	Ones
					8	6
	+		= Eighty seven	<b>87</b>	Tens	Ones
					8	7
	+		= Eighty eight	<b>88</b>	Tens	Ones
					8	8
	+		= Eighty nine	<b>89</b>	Tens	Ones
					8	9
	+		= Ninety	<b>90</b>	Tens	Ones
					9	0



# Numbers from 91 to 100

Read and write numbers from 91 to 100.

	+		=	Ninety one	91	Tens	9	Ones	1
	+		=	Ninety two	92	Tens	9	Ones	2
	+		=	Ninety three	93	Tens	9	Ones	3
	+		=	Ninety four	94	Tens	9	Ones	4
	+		=	Ninety five	95	Tens	9	Ones	5
	+		=	Ninety six	96	Tens	9	Ones	6
	+		=	Ninety seven	97	Tens	9	Ones	7
	+		=	Ninety eight	98	Tens	9	Ones	8
	+		=	Ninety nine	99	Tens	9	Ones	9
	+		=	Hundred	100	Tens	0	Ones	0

Write the number in correct place:

Sixty four	64	Sixty	60	Fifty six	56
Forty three	43	Seventy four	74	Eighty two	82
Sixty five	65	Seventy three	73	Twenty six	26
Seventy seven	77	Sixty one	61	Nineteen	19
Sixty nine	69	Ninety nine	99	Fifty one	51
Eighty	80	Ninety eight	98	Fifty seven	57
Ninety	90	Eighty five	85	Sixty two	62
One	1	Ninety one	91	Seven	7
Two	2	Seventy five	75	Six	6
Eighty seven	87	Eighty eight	88	Hundred	100

Write the number names:

49	Forty nine	71	Seventy one
63	Sixty three	32	Thirty two
51	fifty one	68	Sixty eight
22	Twenty two	50	Fifty
57	Fifty seven	82	Eighty two
92	Ninety two	45	Forty five
85	Eighty five	87	Eighty seven
38	Thirty eight	33	Thirty three
77	Seventy seven	81	Eighty one
36	Thirty six	17	Seventeen
12	Twelve	66	Sixty six
23	Twenty three		
54	Fifty four		
29	Twenty nine		
44	forty four		
19	Nineteen		



## Expanded and Short Form

Fill in the blank boxes:

$$2 \text{ tens} + 0 \text{ ones} = 20$$

$$4 \text{ tens} + 8 \text{ ones} = 48$$

$$6 \text{ tens} + 7 \text{ ones} = 67$$

$$5 \text{ tens} + 1 \text{ ones} = 51$$

$$2 \text{ tens} + 9 \text{ ones} = 29$$

$$6 \text{ tens} + 4 \text{ ones} = 64$$

$$7 \text{ tens} + 5 \text{ ones} = 75$$

$$1 \text{ tens} + 6 \text{ ones} = 16$$

$$9 \text{ tens} + 9 \text{ ones} = 99$$

$$3 \text{ tens} + 0 \text{ ones} = 30$$

$$1 \text{ tens} + 2 \text{ ones} = 12$$

$$7 \text{ tens} + 3 \text{ ones} = 73$$

$$3 \text{ tens} + 3 \text{ ones} = 33$$

$$2 \text{ tens} + 5 \text{ ones} = 25$$

$$5 \text{ tens} + 4 \text{ ones} = 54$$

$$10 \text{ tens} + 0 \text{ ones} = 100$$

$$8 \text{ tens} + 2 \text{ ones} = 82$$

$$5 \text{ tens} + 8 \text{ ones} = 58$$

$$7 \text{ tens} + 7 \text{ ones} = 77$$

$$9 \text{ tens} + 4 \text{ ones} = 94$$

## Abacus Time

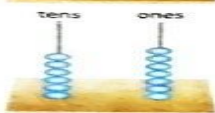
What does the abacus show? Write the number and the number name.



$$50 + 1$$

$$51$$

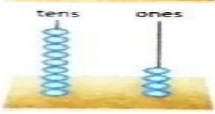
Fifty one



$$60 + 7$$

$$67$$

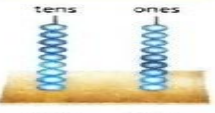
Sixty seven



$$90 + 4$$

$$94$$

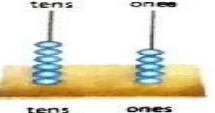
Ninety four



$$90 + 9$$

$$99$$

Ninety nine



$$60 + 5$$

$$65$$

Sixty five



$$0 + 4$$

$$4$$

Four

**EMMANUEL MISSION SR SEC SCHOOL, BEAWAR**  
**GENERAL SCIENCE**  
**CLASS – I**  
**Assessment : Chapter – 1 & 2**

---

**1 Write the names of**

- a. Two things found in nature \_\_\_\_\_.
- b Two things that made by man \_\_\_\_\_.

**2.Which of these is a living thing.**

- a.Ball.    b. Plant

**3. Which of these can eat food .**

- a. Bird    b Book

**EMMANUEL MISSION SR SEC SCHOOL, BEAWAR**  
**SOCIAL STUDIES**  
**CLASS – I**  
**Self Assessment ( Ch. 3 and 4)**

---

**A. Circle the correct words.**

- 1 . We should **obey** / **disobey** our parents.
- 2 . We should brush our teeth **once** / **twice** a day.
- 3 . We must get up **early** / **late** in the morning.
- 4 . We should speak **softly** / **loudly** to everyone.

**B. Fill in the blanks. Choose words from the box.**

( water, children, parents)

- 1 . \_\_\_\_\_ looks after us when we are sick.
- 2 . Parents help their \_\_\_\_\_ in studies.
- 3 . Children can \_\_\_\_\_ the plants.

**C. Fill up the missing letters.**

1. H\_BI\_S      2. P\_EA\_E      3. OB\_Y

**D. Answer these questions.**

1. Where do you throw the garbage ?
2. Why do parents earn money ?
3. For how many hours do you watch T. V. ?
4. Somebody gives you something ; what should you say ?

**EMMANUEL MISSION SR SEC SCHOOL, BEAWAR**  
**COMPUTER**  
**CLASS – I**  
**Self Assessment : Lesson – 3**

---

**Complete the following names :**

**( mark 10 )**



3. M \_ N \_ T O \_



2. M \_ U S \_



4. K \_ Y B \_ A \_ D

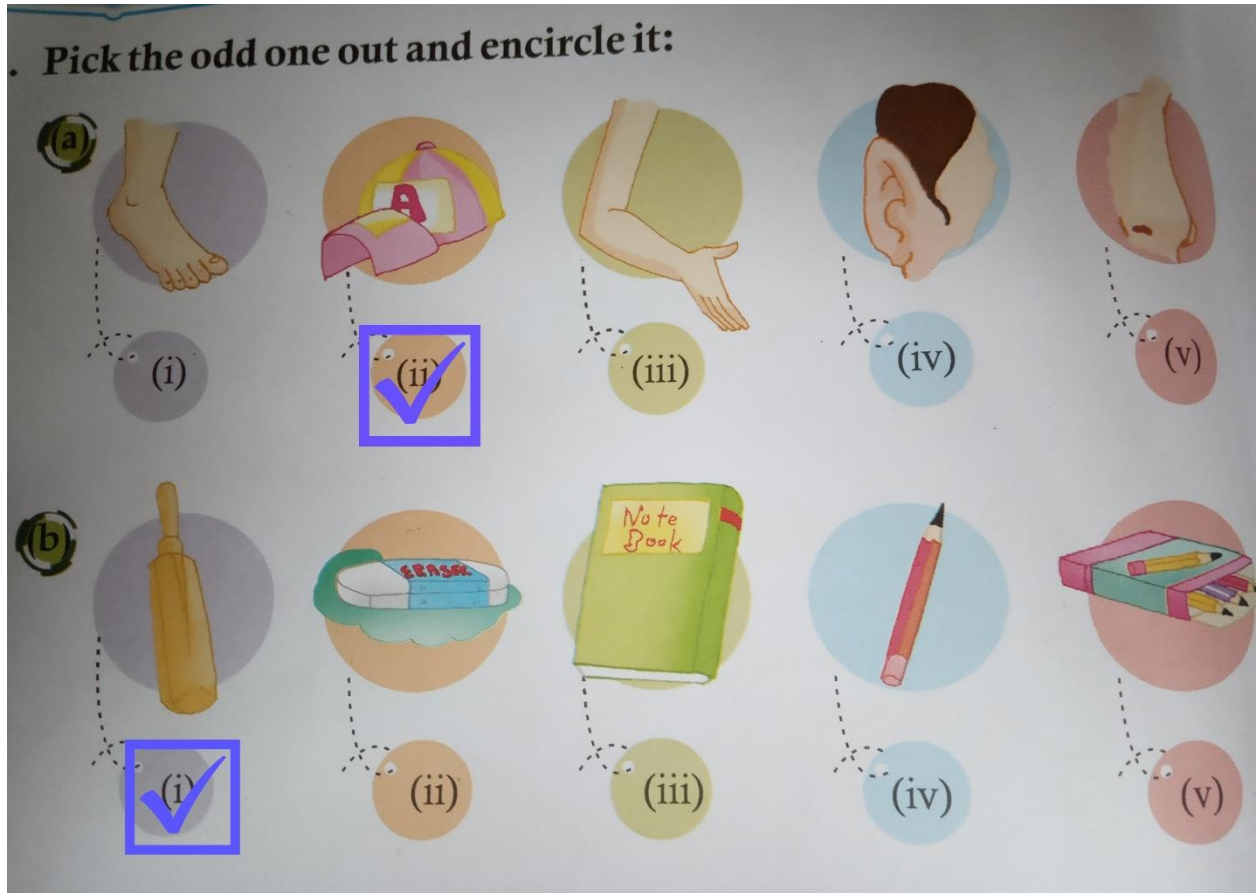


1. C \_ U

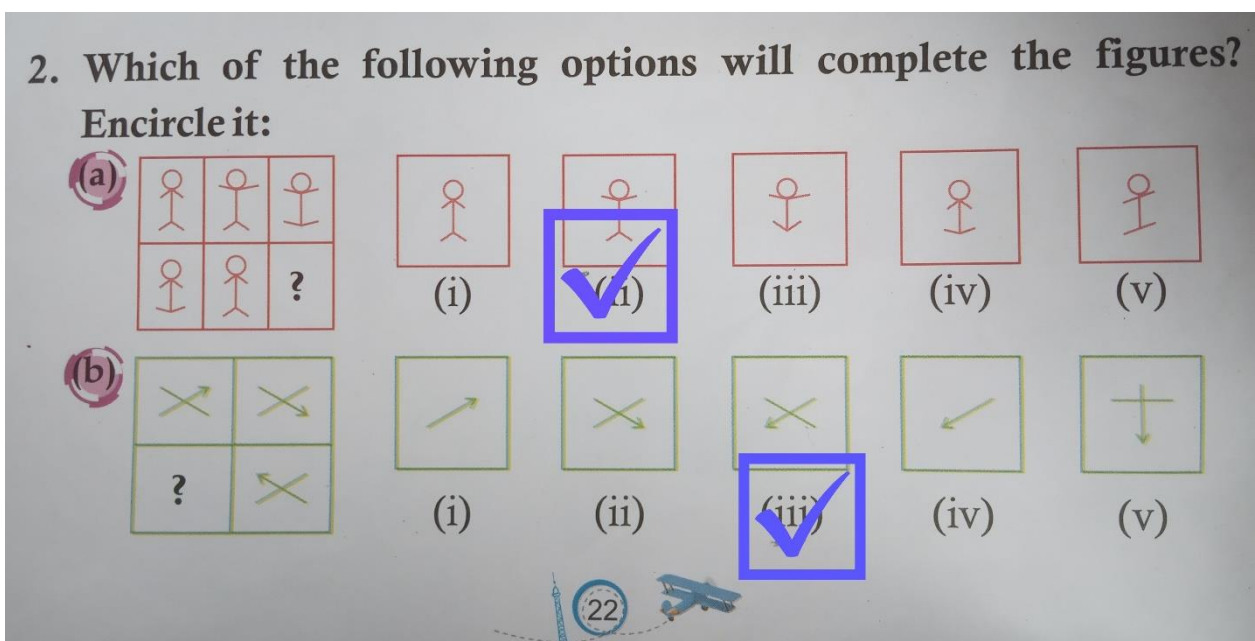


**EMMANUEL MISSION SR SEC SCHOOL, BEAWAR**  
**GENERAL KNOWLEDGE**  
**CLASS – I**  
**Chapter : 13 – Mind Booster**

1. Pick the odd one out and encircle it.









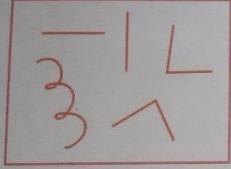





2. Which of the following options will complete the figures ? Encircled it :

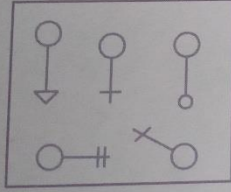







3. Which of the following belongs to the group on the left ?

3. Which of the following belongs to the group on the left?




(a)  (i)  (ii)  (iii)  (iv)  (v) 



(b)  (i)  (ii)  (iii)  (iv)  (v) 



(c)  (i)  (ii)  (iii)  (iv)  (v) 




4. Taking the first two options as clues, find the next correct link and tick ☒ the correct option each :



4. Taking the first two options as clues, find the next correct link and tick (✓) the correct option in each:



(a)  :  ::  : \_\_\_\_\_

(i)  ☒ (ii)  ☐

(iii)  ☐ (iv)  ☐

(b)  :  ::  : \_\_\_\_\_

(i)  ☐ (ii)  ☒

(iii)  ☐ (iv)  ☐